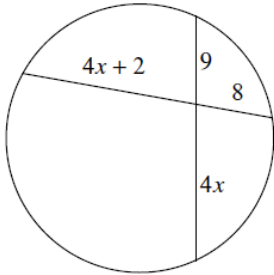
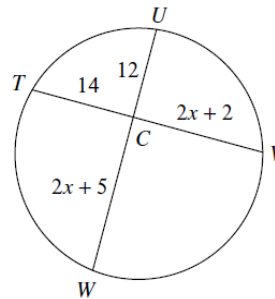


Day 2 – Segment Lengths: Tangents and Secants

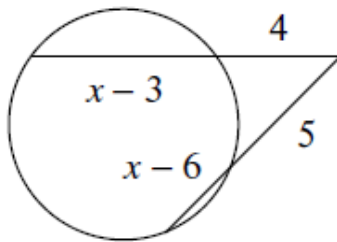
1. $x =$ _____



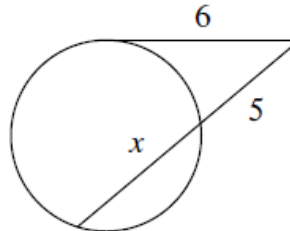
2. $x =$ _____



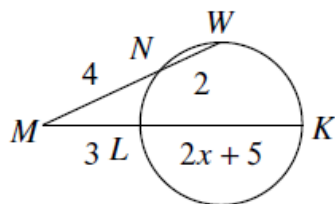
3. $x =$ _____



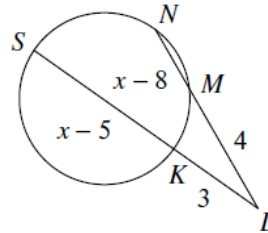
4. $x =$ _____



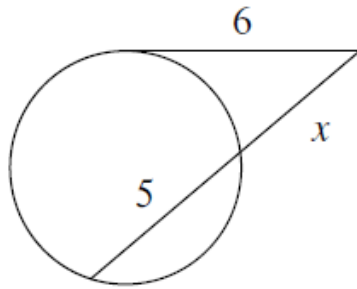
5. $x =$ _____



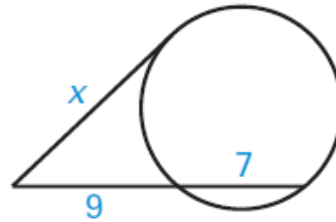
6. $x =$ _____



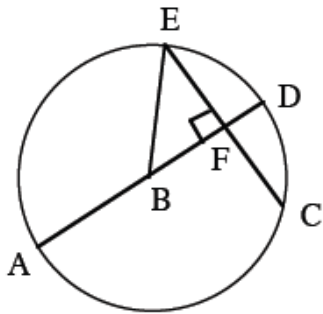
7. $x =$ _____



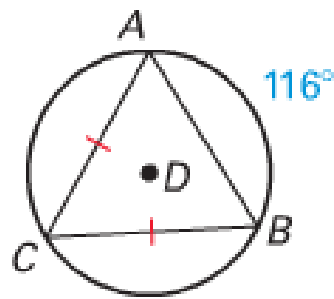
8. $x =$ _____



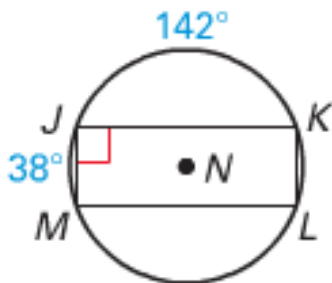
9. $EC = 8, AB = 5, BF =$ _____



10. $m\angle C =$ _____



11. $m\angle KLM =$ _____



12. $m\angle MNP =$ _____

