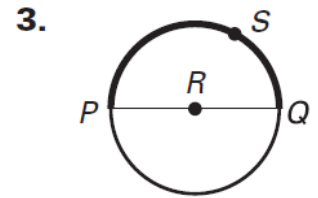
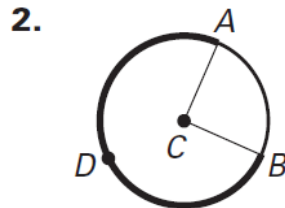
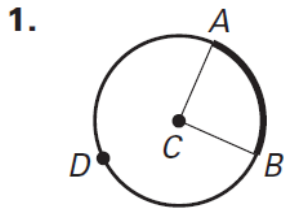


Day 1 – Circle Vocabulary and Central Angles

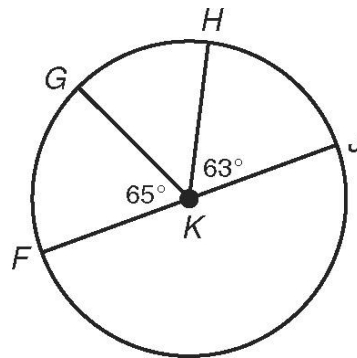
Name the arc shown in bold and classify it (minor, major, or semi).



Find each measure.

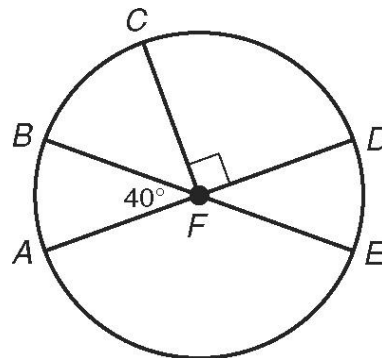
4. $m\widehat{HJ}$ _____

5. $m\widehat{FH}$ _____



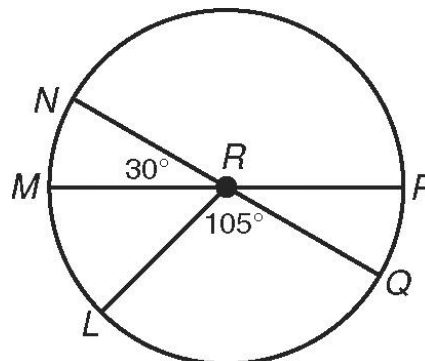
6. $m\widehat{CE}$ _____

7. $m\widehat{BD}$ _____

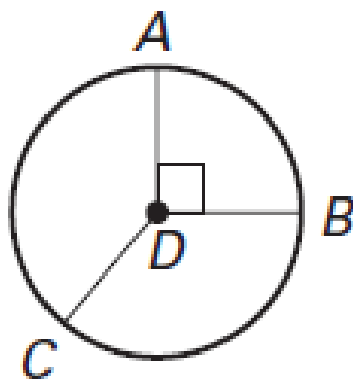


8. $m\widehat{LN}$ _____

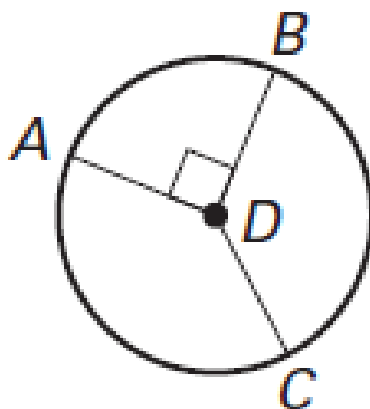
9. $m\widehat{LNP}$ _____



10. $m\widehat{AB}$ _____



11. $m\widehat{ACB}$ _____



12. $m\widehat{CA}$ _____

