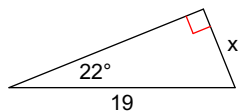


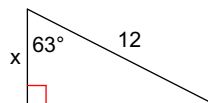
# Day 6 Practice - Trig Ratios: Missing Sides

Use SOH CAH TOA to solve for  $x$ . Round to the nearest tenth.

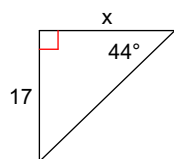
1)



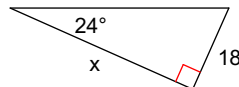
2)



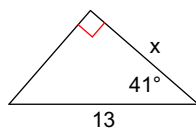
3)



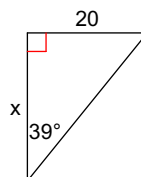
4)



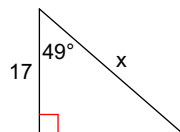
5)



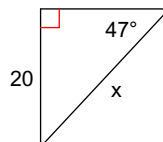
6)

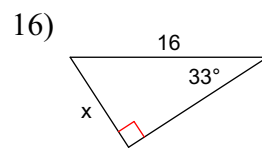
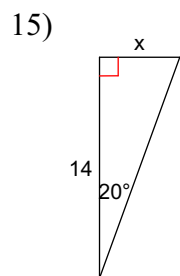
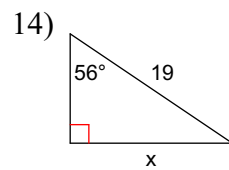
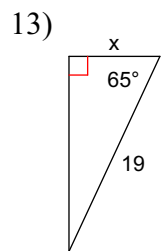
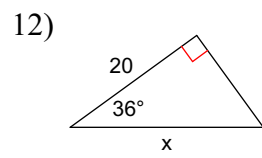
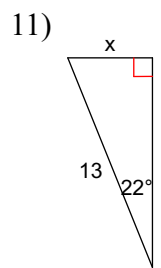
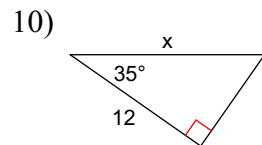
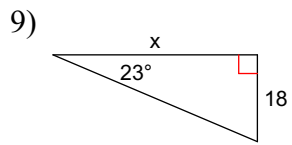


7)



8)





Day 6 Practice - Trig Ratios: Missing Sides

Use SOH CAH TOA to solve for x. Round to the nearest tenth.

